

Name

Chemistry

Key


Combustion Reactions #2

Draw out a structure and write a complete balanced chemical reaction for the combustion.


1. Methane



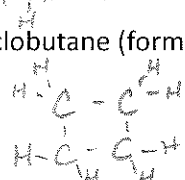
2. Ethane




3. 2-methyl heptane




4. Cyclobutane (forms a circle)



5. 2-methyl 3-ethyl heptane



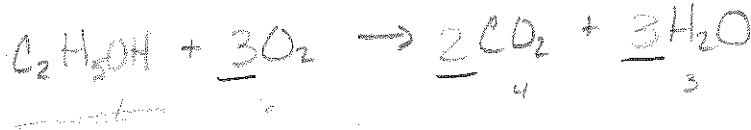
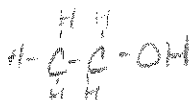
6. Octane



7. 3-ethyl 3-methyl octane



8. Ethanol



9. methanol

