

Standard: #1-1,2
Chemistry


Combustion Reactions #2

Draw out a structure and write a complete balanced chemical reaction for the combustion.

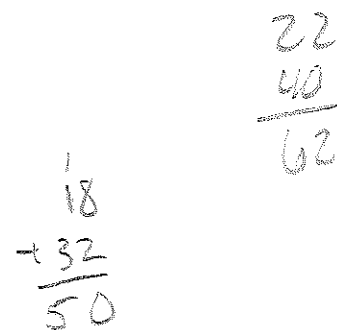
1. Cyclobutane (forms a circle)



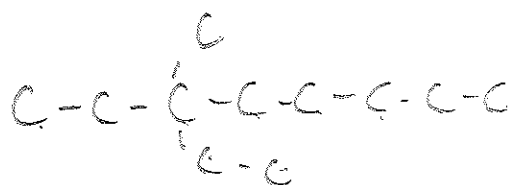
2. 2-methyl 3-ethyl heptane



3. Octane



4. 3-ethyl 3 methyl octane



5. Ethanol



6. methanol

